



Exemplification for maths target sheet – launch pad

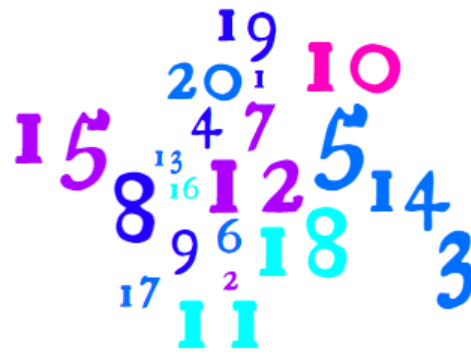
Launch pad

Count to 20

1 One	2 Two	3 Three	4 Four	5 Five
6 Six	7 Seven	8 Eight	9 Nine	10 Ten
11 Eleven	12 Twelve	13 Thirteen	14 Fourteen	15 Fifteen
16 Sixteen	17 Seventeen	18 Eighteen	19 Nineteen	20 Twenty

Launch pad

Read the numbers 1 to 20 in numerals



Launch pad

Say 1 more and 1 less than any number between 0-20

1 more than 6 is _____

1 less than 9 is _____

1 more than 5 is _____

1 less than 16 is _____

1 more than 13 is _____

1 less than 10 is _____

1 less than 15 is _____

1 more than 19 is _____

Launch pad

Know by heart all addition and subtraction facts for each number up to 5

$$5 + 0 =$$

$$5 - 0 =$$

$$4 + 1 =$$

$$4 - 1 =$$

$$3 + 1 =$$

$$3 - 1 =$$

$$2 + 1 =$$

$$2 - 1 =$$

$$1 + 1 =$$

$$1 - 1 =$$

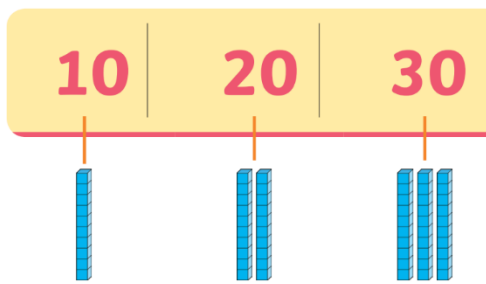
Launch pad
Count in twos



Launch pad
Count in fives



Launch pad
Count in tens



Launch pad
Know my heart all number bonds to 10

$1 + \underline{\quad} = 10$

$8 + \underline{\quad} = 10$

$2 + \underline{\quad} = 10$

$6 + \underline{\quad} = 10$

$3 + \underline{\quad} = 10$

$9 + \underline{\quad} = 10$

$4 + \underline{\quad} = 10$


$7 + \underline{\quad} = 10$

$5 + \underline{\quad} = 10$


$1 + \underline{\quad} = 10$

Launch pad
Recognise odd and even numbers

even



odd



Can you sort the following numbers?

8 3 10 6 9 2 7 12
5 11 4